

Counting

1-100

Reading Cum Writing

A





ONE



One Aeroplane



One Lamp



One Elephant



Kids
IQ

- How many tails does an elephant have?
- When do you light the lamp?



A Request to Teacher

Ask students to count the number of aeroplane, elephant, and lamp.





Trace and write.

1	1	1	1	1	1	1	1	1	1	1
1	1	1	1	1	1	1	1	1	1	1
1	1	1	1	1	1	1	1	1	1	1
1	1	1	1	1	1	1	1	1	1	1
1	1	1	1	1	1	1	1	1	1	1
1	1	1	1	1	1	1	1	1	1	1
1	1	1	1	1	1	1	1	1	1	1
1	1	1	1	1	1	1	1	1	1	1

HOME-WORK

1	1	1	1	1	1	1	1	1	1	1
1	1	1	1	1	1	1	1	1	1	1
1	1	1	1	1	1	1	1	1	1	1
1	1	1	1	1	1	1	1	1	1	1
1	1	1	1	1	1	1	1	1	1	1
1	1	1	1	1	1	1	1	1	1	1
1	1	1	1	1	1	1	1	1	1	1
1	1	1	1	1	1	1	1	1	1	1

Date

Average ★ Good ★★ Excellent ★★★ 3





TWO



Two Bees



Two Tigers



Two Cats



- How many ears does a cat have?
- How many eyes does a bee have?

A Request to Teacher

Ask students to count the number of Bees, Tigers and Cats.

Date

Teacher's Sign



Trace and write.

2 2 2 2 2 2 2 2 2 2

2

2

2

2

HOME-WORK

2 2 2 2 2 2 2 2 2 2

2

2

2

2

2

Date DD MM YYYY

Average ★ Good ★★ Excellent ★★★

5





THREE

Three Birds

Three Trees

Three Jeeps



Kids IQ

- How many wings does a bird have?
- Where do the birds fly?



A Request to Teacher

Ask students to count the number of Birds, trees and jeeps.

6 Date

Teacher's Sign



Trace and write.

3	3	3	3	3	3	3	3	3	3
3
3
3
3
3

HOME-WORK

3	3	3	3	3	3	3	3	3	3
3
3
3
3
3

Date DD MM YYYY

Average ★ Good ★★ Excellent ★★★





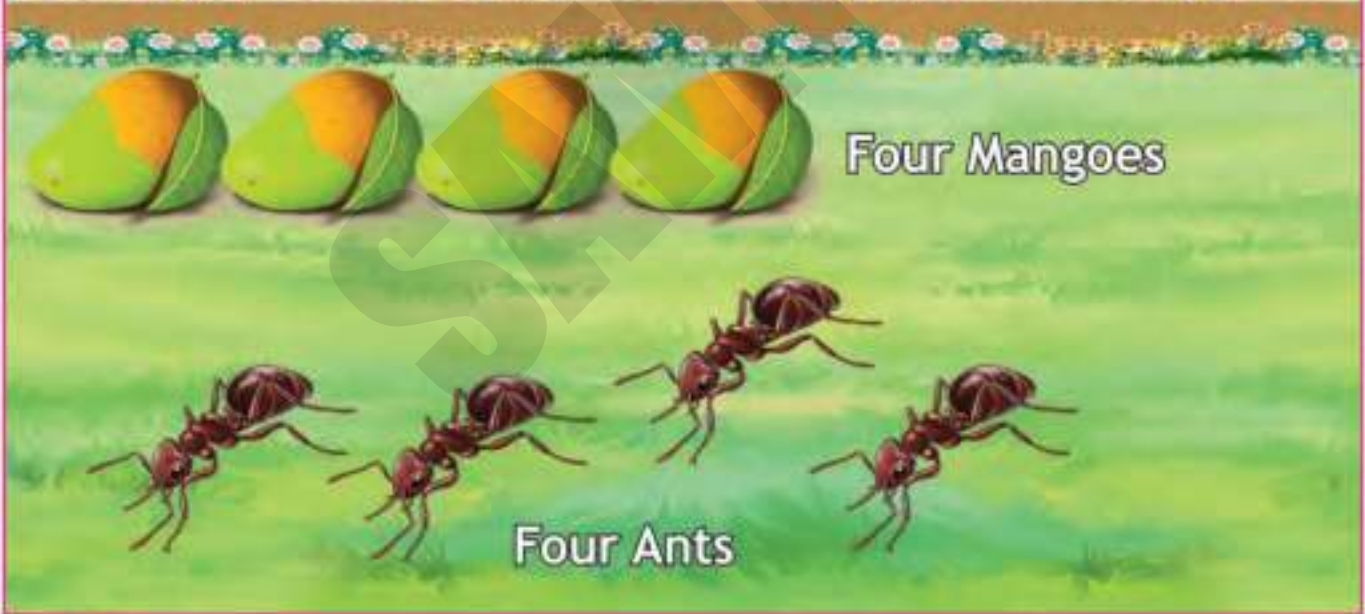
FOUR



Four Pigeons



Four Trees



Four Mangoes

Four Ants



Kids IQ

- How many mango leaves are there in the picture?
- What is the colour of trees?



A Request to Teacher

Ask students to count the number of Pigeons, trees, mangoes and ants.

8 Date

Teacher's Sign



Trace and write.

4	4	4	4	4	4	4	4	4	4
4									
4									
4									
4									
4									

HOME-WORK

4	4	4	4	4	4	4	4	4	4
4									
4									
4									
4									
4									

Date

Average Good Excellent





FIVE

Five Umbrellas

Five Boys

Five Frogs

Five Ships



Kids IQ

- Where does a frog live?
- When do you use the umbrella?



A Request to Teacher

Ask students to count the number of Umbrellas, boys, frogs and ships.



Trace and write.

5 5 5 5 5 5 5 5 5 5

5

5

5

5

5

HOME-WORK

5 5 5 5 5 5 5 5 5 5

5

5

5

5

5

Date DD MM YYYY

Average ★ Good ★★ Excellent ★★★





SIX



Six Aeroplanes



Six Dogs



Six Footballs



**Kids
IQ**

- Where do you play football?
- Where does an aeroplane fly?



A Request to Teacher

Ask students to count the number of Aeroplanes, dogs and footballs.



Trace and write.

6

6

6

6

6

6

6

6

6

6

6

6

6

6

6

HOME-WORK

6

6

6

6

6

6

6

6

6

6

6

6

6

6

6

Date

Average ★ Good ★★ Excellent ★★★



7

SEVEN

Seven Monkeys

Seven Hens

Seven Eggs



Kids IQ

- Where do monkeys live?
- What is the colour of eggs?



A Request to Teacher

Ask students to count the number of Monkeys, hens and eggs.

14

Date

Teacher's Sign



Trace and write.

7

7

7

7

7

7

HOME-WORK

7

7

7

7

7

7

Date

Average Good Excellent



8

EIGHT



Eight Birds



Eight Sheep

Eight Chickens



Kids
IQ

- What do sheep eat?
- How many legs does a sheep have?



A Request to Teacher

Ask students to count the number of Birds, chickens and sheep.



Trace and write.

8

8

8

8

8

8

8

8

8

8

8

8

8

8

8

HOME-WORK

8

8

8

8

8

8

8

8

8

8

8

8

8

8

8

Date DD MM YYYY

Average ★ Good ★★ Excellent ★★★





NINE

Nine Jackfruits

Nine Crocodiles

Nine Deers



Kids
IQ

- How many houses are there in the picture?
- Where do the crocodiles live?



A Request to Teacher

Ask students to count the number of Jackfruits, deers and crocodiles.



Trace and write.

9	9	9	9	9	9	9	9	9	9
9									
9									
9									
9									
9									

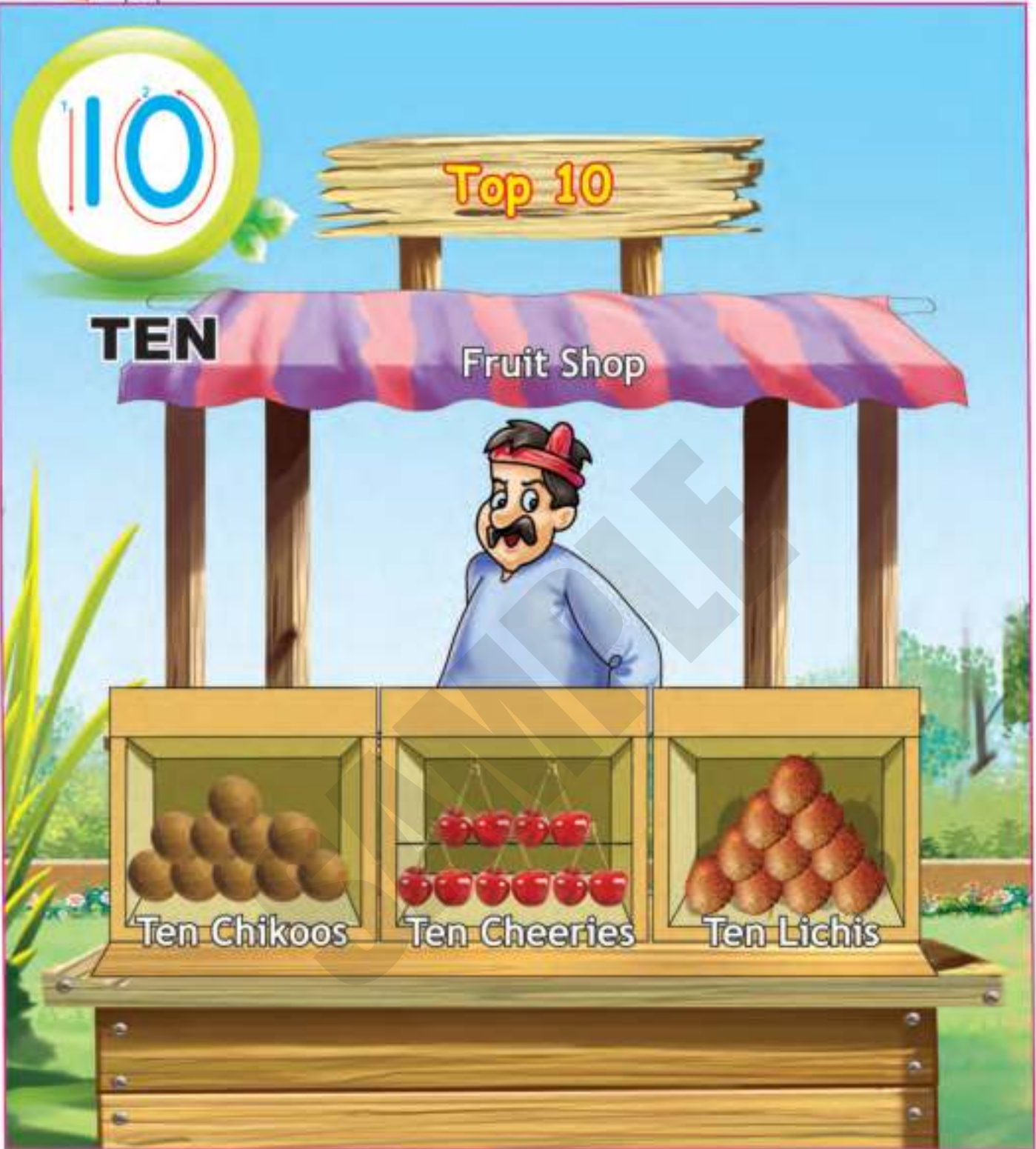
HOME-WORK

9	9	9	9	9	9	9	9	9	9
9									
9									
9									
9									
9									

Date

Average ★ Good ★★ Excellent ★★★





TEN

Top 10

Fruit Shop



Ten Chikoos



Ten Cheeries



Ten Lichis



Kids
IQ

- What is the colour of cherries?
- How many fingers do you have?

A Request to Teacher

Ask students to count the number of chikoos, cheerys and lichis.

20

Date

Teacher's Sign



Trace and write.

10	10	10	10	10	10	10	10	10	10
10									
10									
10									
10									
10									

HOME-WORK

10	10	10	10	10	10	10	10	10	10
10									
10									
10									
10									
10									

Date

Average ★ Good ★★ Excellent ★★★ 21



Encircle the correct number:



5 1 3

2 1 5



4 2 6

8 1 5



4 5 2



Kids
IQ

- How many tails does an elephant have?
- How many eyes does a doll have?



Count and write the correct number:



Kids
IQ

- When do you cut the cake?
- How many legs does a hen have?

Date

Average ★ Good ★★ Excellent ★★★





Trace and write.

ELEVEN Ice-creams



Kids IQ

- Eleven comes after which number?
- Where do you keep ice cream at your home?

HOME-WORK

24 Date

Teacher's Sign



12



Trace and write.

TWELVE Dogs

12	2	2	2	2	2	2	2	2	2	2
2
2
2



Kids IQ

- What do dogs eat?
- Which numbers do you need to write twelve?

HOME-WORK

12	2	2	2	2	2	2	2	2	2	2
2
2
2

Date

Average ★ Good ★★ Excellent ★★★



13



Trace and write.

THIRTEEN Oranges

13	13	13	13	13	13	13	13	13	13	13
13										
13										
13										



Kids IQ

- Thirteen comes after which number?
- Where are the oranges?

HOME-WORK

13	13	13	13	13	13	13	13	13	13	13
13										
13										
13										





Trace and write.

FOURTEEN Balls

	14	14	14	14	14	14	14	14	14
14									
14									
14									



Kids IQ

- What games are played with the ball?
- Which numbers do you need to write fourteen?

HOME-WORK

14	14	14	14	14	14	14	14	14	14
14									
14									
14									

Date

Average ★ Good ★★ Excellent ★★★



15



Trace and write.

FIFTEEN Mushrooms

15	5	5	5	5	5	5	5	5	5	5
5										
5										
5										



Kids IQ

- What is the colour of mushrooms?
- What does a mushroom look like?

HOME-WORK

15	5	5	5	5	5	5	5	5	5	5
5										
5										
5										



16



Trace and write.

SIXTEEN Cameras

16	16	16	16	16	16	16	16	16	16
16									
16									
16									



Kids IQ

- What is the use of the camera?
- Sixteen comes after which number?

HOME-WORK

16	16	16	16	16	16	16	16	16	16
16									
16									
16									

Date

Average ★ Good ★★ Excellent ★★★





Trace and write.

SEVENTEEN Dices

17									



Kids IQ

- Which game do you play with dice?
- Which numbers do you need to write seventeen?

HOME-WORK

17									

30 Date

Teacher's Sign





Trace and write.

EIGHTEEN Roses



Kids IQ

- Where do you see the flowers?
- Which flower do you see in the picture?

HOME-WORK

Date

Average ★ Good ★★ Excellent ★★★



19



Trace and write.

NINETEEN Locks

	9	9	9	9	9	9	9	9	9
9									
9									
9									



Kids IQ

- What do you need to open the lock?
- Nineteen comes after which number?



HOME-WORK

19	9	9	9	9	9	9	9	9	9
9									
9									
9									



Trace and write.

TWENTY Tomatoes

20	20	20	20	20	20	20	20	20	20
20									
20									
20									



Kids IQ

- What is the colour of tomato?
- How many fingers are there in your hands and feet?

HOME-WORK

20	20	20	20	20	20	20	20	20	20
20									
20									
20									

Date

Average ★ Good ★★ Excellent ★★★



Count and write the number in the box.




16



Kids IQ

- What is the colour of litchi?
- What is the shape of the ball?





21 21 21 21 21 21

21

21

21

21

21

21

22 22 22 22 22 22

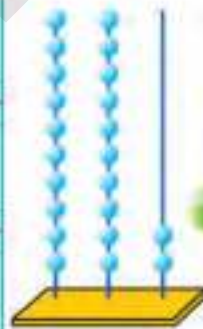
22

22

22

22

22




Kids IQ

- Which numbers do you need to write twenty-one?
- How many twos are there in twenty-two?

Date DD MM YYYY

Average ★ Good ★★ Excellent ★★★





23 23 23 23 23 23

23

23

23

23

23

23

24 24 24 24 24 24

24

24

24

24

24



24



Kids
IQ

- Twenty-three comes after which number?
- Which number will come first twenty-three or twenty-four?





25 25 25 25 25 25

25 25

25 25

25

25

25

25

26

26 26 26 26 26 26

26

26

26

26

26



Kids IQ

- Which number comes before the twenty-five?
- Which will come first twenty five or twenty-six?

Date

Average ★ Good ★★ Excellent ★★★





27 27 27 27 27 27

27

27

28 28 28 28 28 28



28

28

28

28

28



Kids IQ

- Which number comes after twenty-six?
- Which numbers do you need to write twenty-eight?





29 29 29 29 29 29

29

29

29

29

29

29

30 30 30 30 30 30


30

30

30

30

30



Kids IQ

- What comes before twenty-nine?
- How many zeroes are there in number thirty?

Date DD MM YYYY

Average ★ Good ★★ Excellent ★★★



Arrange the numbers in the correct ascending order.

36	20	41	17	29	26	45
17	20	26				

43	37	28	35	44	19	23

25	18	31	40	27	38	21


Arrange the numbers in the correct descending order.

22	37	16	43	27	45	39
45	43	39				

27	21	13	10	47	11	33

46	31	20	28	34	19	40





31 31 31 31 31 31

31

31


31

31

31

31

32 32 32 32 32 32



32

32

32

32

32

32



Kids
IQ

- Which numbers are neighbours of thirty-one?
- Which numbers do you need to write thirty-two?

Date

Average ★ Good ★★ Excellent ★★★

41





33 33 33 33 33 33

33

33


33

33

33

33

34 34 34 34 34 34



34

34

34

34



Kids IQ

- How many threes do you need to write thirty-three?
- Which number comes before thirty-four?

42 Date

Teacher's Sign





35 35 35 35 35 35

35

35

35

35

35

35

36 36 36 36 36 36



36

36

36

36

36



Kids IQ

- Which numbers are neighbours of thirty-five?
- Which number comes after thirty-five?

Date

Average ★ Good ★★ Excellent ★★★





37 37 37 37 37 37

37

37

37

37

37

37

38 38 38 38 38 38



38

38

38

38

38



Kids
IQ

- Which numbers do you need to write thirty-seven?
- Which number comes first, 37, 32, or 33?

44 Date

Teacher's Sign





39 39 39 39 39 39

39

39

39

39

39

39

40 40 40 40 40 40

40

40

40

40

40



- Who is the neighbour of forty, 39 or 37?
- Which numbers do you need to write forty?

Date

Average ★ Good ★★ Excellent ★★★





41	41	41	41	41	41	41
41						
41						

42	42	42	42	42	42	42
42						
42						



43	43	43	43	43	43	43
43						
43						

44	44	44	44	44	44	44
44						
44						



45	45	45	45	45	45	45
45						
45						



Kids IQ

- Which numbers are the neighbours of forty-two?
- Which number comes after forty-three?

46 Date

Teacher's Sign





46 46 46 46 46 46 46

46

46

47 47 47 47 47 47 47

47

47



48 48 48 48 48 48 48

48

48

49 49 49 49 49 49 49

49

49



50 50 50 50 50 50 50

50

50



Kids
IQ

- Which comes first 48, 49, 50, or 47?
- Which number will come in between 48 and 50?

Date

Average ★ Good ★★ Excellent ★★★ 47



Write the numerals.

Twenty-seven

Thirty-two

Forty-five

Thirty-nine

Twelve

Twenty-six

Forty

Thirty-one

Fifteen

Thirty

Sixteen

Twenty-two

Thirty-three

Eleven

Twenty-two

Thirty-four

Eighteen

Twenty

Twenty-five

Nineteen

Thirteen

Twenty-eight

Fifty

Forty-eight

Forty-nine

Thirty-eight

Forty-three

Seventeen

Forty-six

Twenty-four

Forty-seven

Fourteen

Thirty-seven

Forty-one

Thirty-six

Twenty-three

Forty-two

Twenty-nine

Forty-four

Thirty-five





51 51 51 51 51 51 51

51

51

52 52 52 52 52 52 52

52

52



53 53 53 53 53 53 53

53

53

54 54 54 54 54 54 54

54

54



55 55 55 55 55 55 55

55

55



- How many fives are there in fifty-five?
- How many numbers are there in between 51 and 55?

Date

Average ★ Good ★★ Excellent ★★★





56 56 56 56 56 56 56
56
56

57 57 57 57 57 57
57
57



58 58 58 58 58 58
58
58

59 59 59 59 59 59
59
59



60 60 60 60 60 60
60
60



Kids
IQ

- Which number comes before fifty-six?
- Which number is big, 58 or 59?

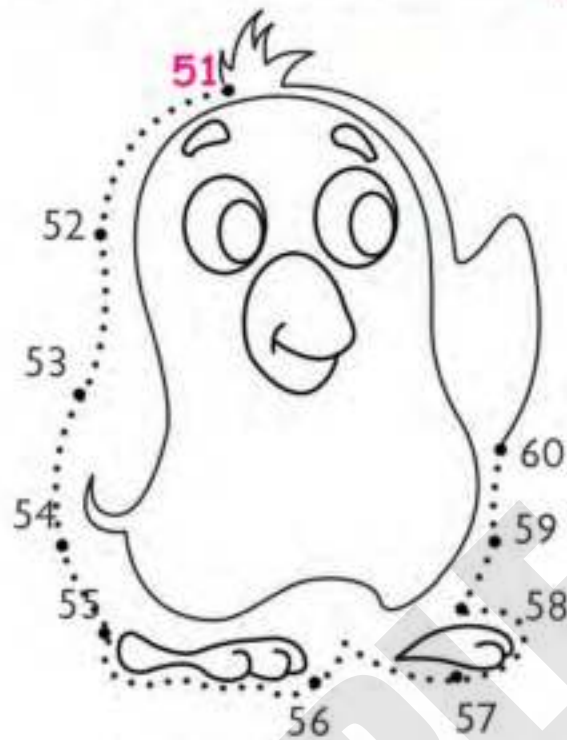
50

Date

Teacher's Sign




Connect the dots from 51 to 60 & colour the picture.



Kids
IQ

- How many penguins are there in the picture?

Write the number which comes after in penguin.



Date

Average ★ Good ★★ Excellent ★★★ 51





61	61	61	61	61	61	61
61						
61						

62	62	62	62	62	62	62
62						
62						



63	63	63	63	63	63	63
63						
63						

64	64	64	64	64	64	64
64						
64						



65	65	65	65	65	65	65
65						
65						



- Which number comes in between 63 and 65?
- Which numbers do you need to write sixty-four?





66 66 66 66 66 66 66

66

66

67 67 67 67 67 67 67

67

67



68 68 68 68 68 68 68

68

68

69 69 69 69 69 69 69

69

69



70 70 70 70 70 70 70

70

70



Kids
IQ


- Which number comes before sixty-six?
- Which numbers are the neighbours of 69?

Date

Average ★ Good ★★ Excellent ★★★




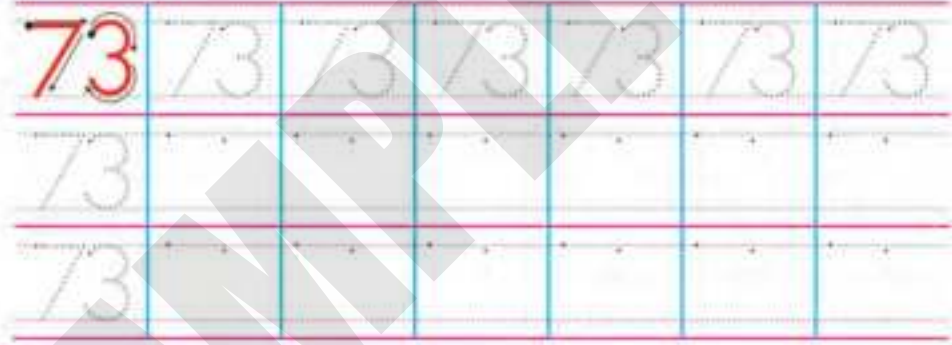


Write the missing numbers in the flowers & girl's dress.



Kids
IQ

• How many flowers are there in the picture?





Kids
IQ

- Which number comes before seventy-one?
- Which numbers are the neighbours of seventy-three?

Date

Average ★ Good ★★ Excellent ★★★ 55





76 76 76 76 76 76 76

76

76

77 77 77 77 77 77 77

77

77



78 78 78 78 78 78 78

78

78

79 79 79 79 79 79 79

79

79



80 80 80 80 80 80 80

80

80



Kids IQ

- Which number comes first 80, 79, or 78?
- Which numbers do you need to write eighty?

56 Date

Teacher's Sign



Write the number names.

71 _____

76 _____

72 _____

77 _____

73 _____

78 _____

74 _____

79 _____

75 _____

80 _____

Tick (✓) or (X).

74 is more than 73.

78 is less than 80.

72 is in between 73 and 74.

80 is more than 79.

77 is less than 76.

71 comes before 72.



Date

Average ★ Good ★★ Excellent ★★★ 57





81	81	81	81	81	81	81
81						
81						

82	82	82	82	82	82	82
82						
82						



83	83	83	83	83	83	83
83						
83						

84	84	84	84	84	84	84
84						
84						



85	85	85	85	85	85	85
85						
85						



Kids IQ

- Which numbers are the neighbours of eighty-two?
- Which number comes first 85, 83, or 84?





86	86	86	86	86	86	86
86						
86						

87	87	87	87	87	87	87
87						
87						



88	88	88	88	88	88	88
88						
88						

89	89	89	89	89	89	89
89						
89						



90	90	90	90	90	90	90
90						
90						



Kids IQ

- How many eight do you need to write eighty-eight?
- Which numbers do you need to write eighty-nine?

Date DD MM YYYY

Average ★ Good ★★ Excellent ★★★



Write the number names.

81 - _____

82 - _____

83 - _____

84 - _____

85 - _____

86 - _____

87 - _____

88 - _____

89 - _____

90 - _____

Tick (✓) or (X).

84 is more than 83.

88 is less than 87.

81 is in between 82 and 83.

89 is more than 89.

82 is less than 83.

85 comes before 86.

60 Date

Teacher's Sign





91	91	91	91	91	91	91
91						
91						

92	92	92	92	92	92	92
92						
92						



93	93	93	93	93	93	93
93						
93						

94	94	94	94	94	94	94
94						
94						



95	95	95	95	95	95	95
95						
95						



Kids IQ

- Which number comes before ninety-one?
- Which number is the neighbour of both ninety-three and ninety-five?

Date DD MM YYYY

Average ★ Good ★★ Excellent ★★★ 61





96	96	96	96	96	96	96
96						
96						

97	97	97	97	97	97	97
97						
97						



98	98	98	98	98	98	98
98						
98						

99	99	99	99	99	99	99
99						
99						



100	100	100	100	100	100	100
100						
100						



Kids IQ

- Which number comes in between ninety-six and ninety-eight?
- How many zeroes are there in one-hundred?



Let's write numbers 100-1 backwards in sea waves.



100				50	30		
	88						
		67					
96							
					35		
	74					14	
			53				
						22	
							1



• How many flags are there on the ship?

Date

Average ★ Good ★★ Excellent ★★★

63



Join the dots in order and Colour the picture obtained.



64 Date

Teacher's Sign

